


Ancient Egyptian Hierarchy



1.) Who is at the top of this Hierarchy? _____

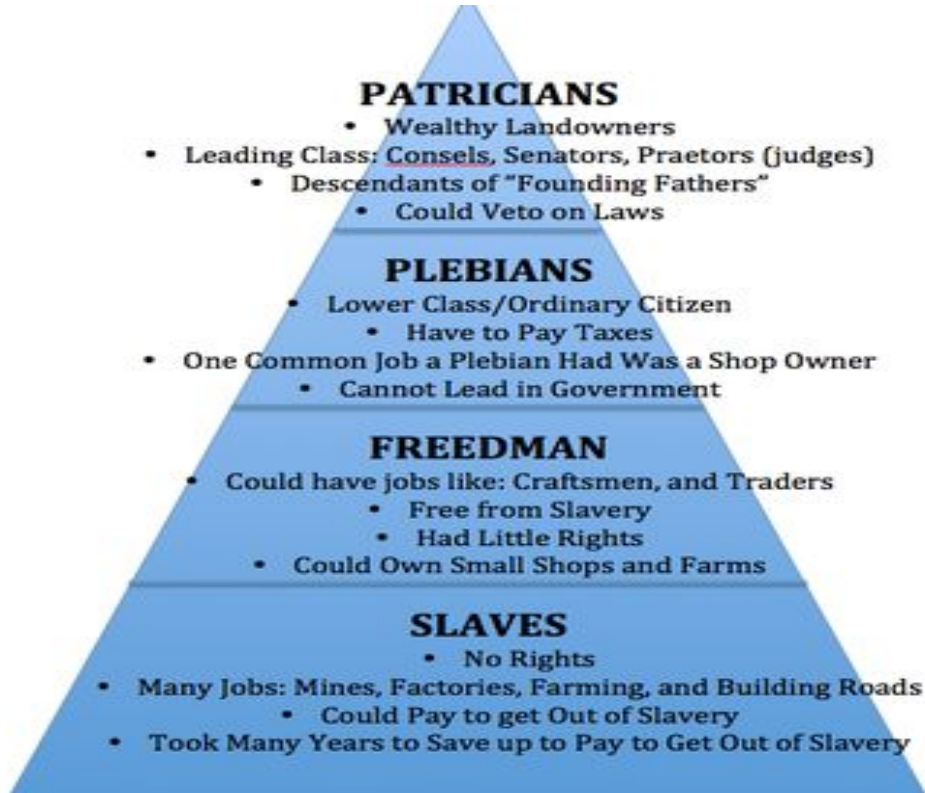
2.) Who is at the bottom of this Hierarchy? _____

3.) How are populations at the top and bottom different within the hierarchy?

4.) How does the political and economic power a person has depend on their social class?

5.) How does this hierarchy reflect this civilization's values?

Ancient Roman Hierarchy



1.) Who is at the top of this Hierarchy? _____

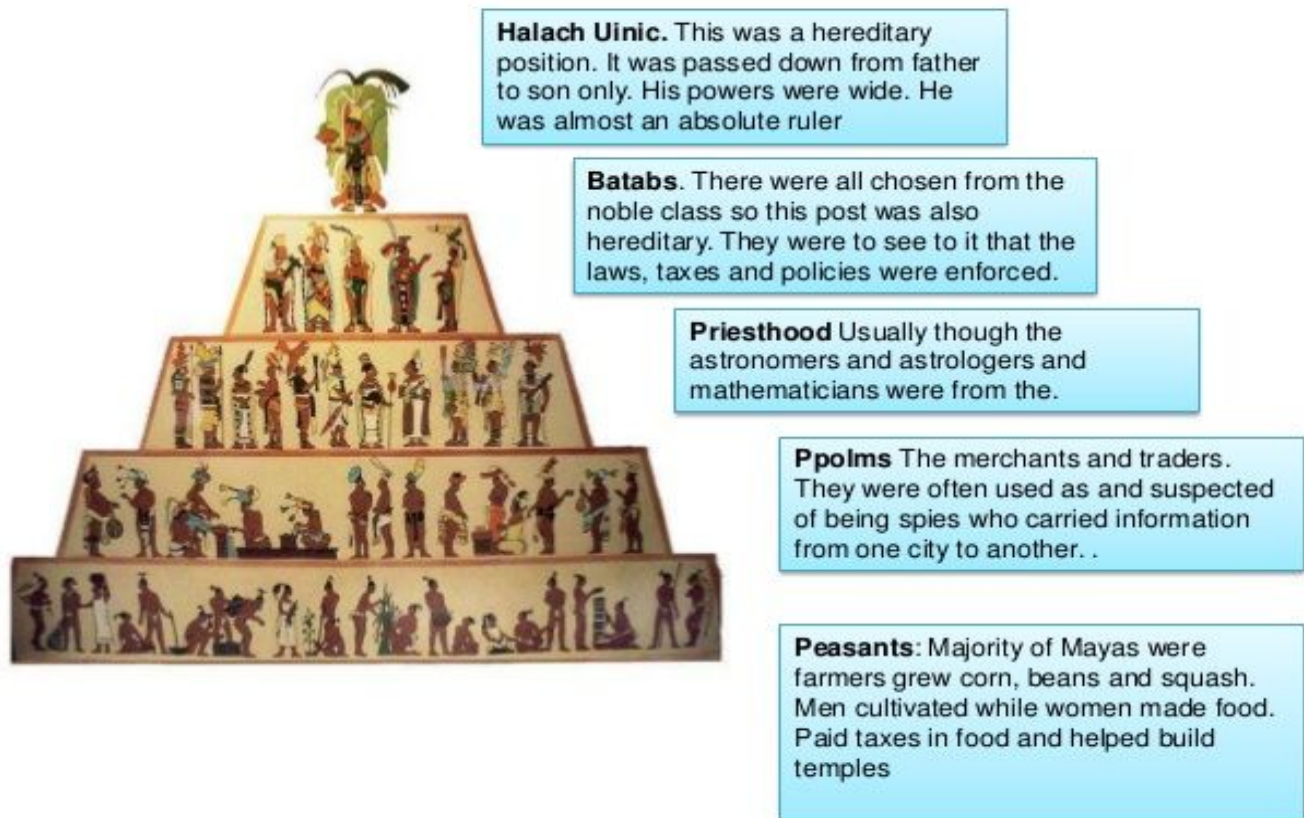
2.) Who is at the bottom of this Hierarchy? _____

3.) How are populations at the top and bottom different within the hierarchy?

4.) How does the political and economic power a person has depend on their social class?

5.) How does this hierarchy reflect this civilization's values?

MAYA SOCIAL STRUCTURE



1.) Who is at the top of this Hierarchy? _____

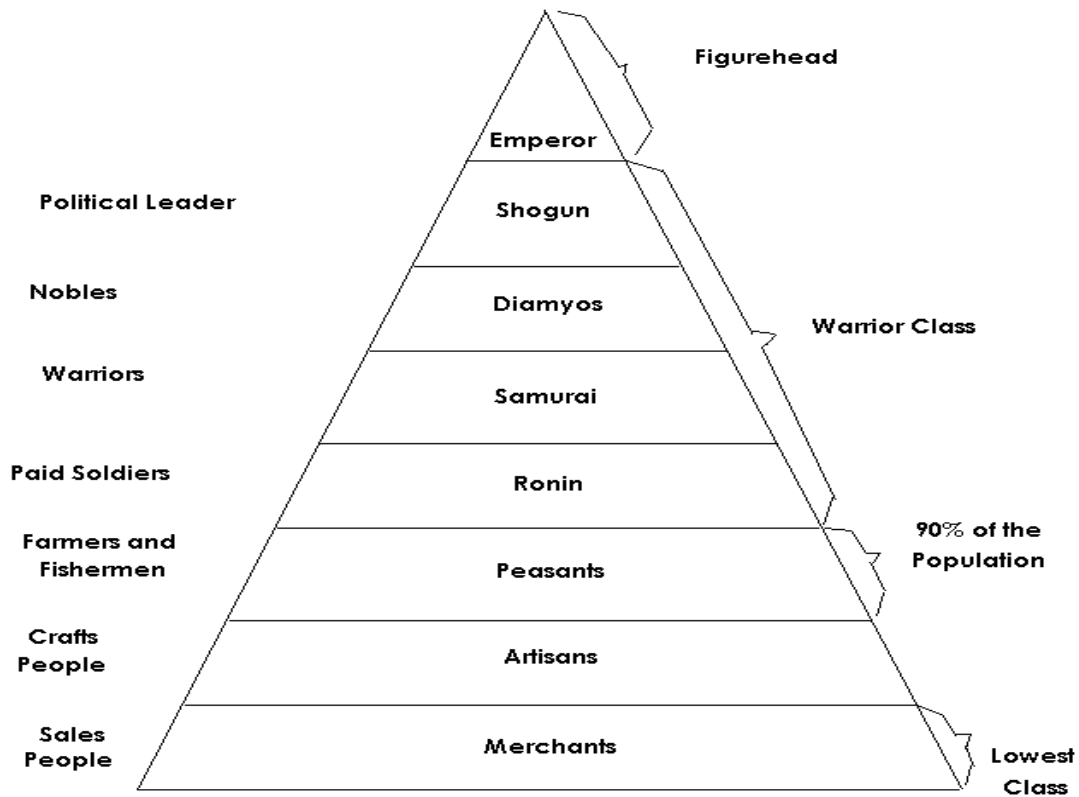
2.) Who is at the bottom of this Hierarchy? _____

3.) How are populations at the top and bottom different within the hierarchy?

4.) How does the political and economic power a person has depend on their social class?

5.) How does this hierarchy reflect this civilization's values?

Medieval Japan's Feudalism



1.) Why do you think so many peasants are needed?

2.) What is the difference between where Peasants are on the Japanese Social Structure and where Peasants are in other Social Structures? Why do you think this is?

3.) According to the above diagram, who is Japan's true political leader? What does this say about the Emperor?

4.) Why do you think Merchants are considered the lowest class in Japan's Social Structure?

5.) Describe at least one similarity and one difference between Japan's Social Structure and any other Social Structure on this document.

Ancient Mesopotamian Social Structure



1.) What does the top section of the pyramid represent? What information did you use to come to that answer?

2.) What do you think some differences are between the "Officials, Scribes, Minor Priests" level and the Craftsmen level?

3.) What do you think a difference is between High Priests and Minor Priests?

4.) Examine the Japan Social Structure Diagram and the Mesopotamian Social Structure Diagram- what difference do you see in how much power the second-highest position had in each society?

—

5.) Describe at least one similarity and one difference between Japan's Social Structure and any other Social Structure on this document.

—

